



KĀSIGA SCHOOL

DEHRADUN

Holiday Homework Summer Break 2020



GRADE 4

ENGLISH

- **Speaking Assessment**(Total Marks 10: Content – 5 marks, Presentation – 5 marks)

Character Enactment

What you have to do -

1. Choose a character from a book that you have read.
2. Choose a long dialogue.
3. Memorize the dialogue.
4. Perform the dialogue with emotions.
5. Make a video of yourself performing the dialogue.
6. The performance should be 60 – 90 seconds long.
7. The video to be submitted by 28/06/2020. Please email it to my email id rsethi@kasigaschool.com
Mention your name in the email.

- **Writing Assessment**(Total Marks 10: Content – 5 marks, Presentation – 5 marks)

Make a travel brochure.

The travel brochure will include –

1. Choose the place you would like to visit after the lockdown ends.
2. Mention the ways you can reach the place (Transportation) (from the airport, bus stop, train station etc.)
3. The climate throughout the year.
4. Famous places to visit there (with images)
5. Historical places to visit there (with images)
6. Local delicacies (food) to try.
7. Zig-zag fold (image on the next page)



<https://www.youtube.com/watch?v=7zz-HrIkIDs>

Click on the link to get an idea of what a travel brochure looks like.

HINDI

ग्रीष्मकालीन गृहकार्य २०२०

कक्षा ४

- १- 'सुबह की सैर का लाभ' विषय पर ८-१० पंक्तियों का अनुच्छेद लिखिए।
- २- 'लाकडाउन के समय आपने अपना समय कैसे बिताया' ये बताते हुए ८-१० वाक्यों का अनुच्छेद लिखिए।
- ३- दिए गये चित्रों को देख कर प्रत्येक के विषय में ६-८ वाक्य लिखिए।



डॉ. आर. जैन वाटिका सीनियर सेंकड्री स्कूल



गार रोड, अम्बाला शहर

कक्षा : आठवीं

शीर्षक : चित्र लेखन



MATHEMATICS



NAME : _____

Instructions-

- All answers to be written in the given worksheet.
- Use a pencil to do the given worksheet.
- The overall presentation of the work should be neat and clean.
- Avoid any stray marks or cutting on the paper.

Q1. Write number name for the following numerals-

- 43,56,208 _____
- 3,46,489 _____
- 12,14,905 _____
- 5,69,065 _____
- 32,01,472 _____

Q2. Write the face value and the place value of each of the underlined digits. Also write the number in the expanded form-

| | Number | Place value | Face value | Expanded form |
|----|------------------|-------------|------------|---------------|
| a. | 9 <u>8</u> 60432 | | | |
| b. | 55432 <u>31</u> | | | |
| c. | 8 <u>7</u> 6221 | | | |
| d. | <u>11</u> 20638 | | | |
| e. | 2329 <u>0</u> 84 | | | |

Q3. Separate out Even and Odd numbers from the given list of numbers-

8934, 3295, 1290, 4502, 6711, 8764, 4563, 9249, 9127, 1678

Even numbers: _____

Odd numbers: _____

Q4. Write the predecessor and successor of the following number-

| | Predecessor | Number | Successor |
|----|-------------|---------|-----------|
| a. | | 8952200 | |
| b. | | 124830 | |
| c. | | 265786 | |
| d. | | 529359 | |
| e. | | 3484211 | |

Q5. Write the number in the standard form-

a. $5000 + 200 + 30 + 9$ _____

b. $2000 + 700 + 40 + 6$ _____

c. $7000 + 20 + 4$ _____

d. $4000 + 5$ _____

e. $4000 + 800 + 30$ _____

f. $3000 + 200 + 70 + 1$ _____

Q6. Complete the following number pattern-

a. 8293, _____, 8297, 8299, _____

b. 3422, 3424, _____, _____, 3430

c. 6711, 6713, _____, 6717, _____

d. 7038, _____, 7042, _____, 7046

e. 5000, _____, 5004, 5006, _____

f. 7937, 7939, _____, _____, 7945

Q7. Fill in the boxes with <, > or = sign-

a. 6528 _____ 6240

b. 8038 _____ 8038

c. 1829 _____ 1670

d. 7281 _____ 7821

e. 9999 _____ 999

f. 2810 _____ 2810

**Q8. Find out the numbers that come in the tables of 5,6 and 8 .
Colour the table of 5 in red ,table of 6 in green& table of 8 in yellow colour.**

| | | | | | | | | | |
|-----------|-----------|-----------|-----------|-----------|-----------|-----------|-----------|-----------|------------|
| | 2 | 3 | 4 | 5 | 6 | 7 | 8 | 9 | 10 |
| 11 | 12 | 13 | 14 | 15 | 16 | 17 | 18 | 19 | 20 |
| 21 | 22 | 23 | 24 | 25 | 26 | 27 | 28 | 29 | 30 |
| 31 | 32 | 33 | 34 | 35 | 36 | 37 | 38 | 39 | 40 |
| 41 | 42 | 43 | 44 | 45 | 46 | 47 | 48 | 49 | 50 |
| 51 | 52 | 53 | 54 | 55 | 56 | 57 | 58 | 59 | 60 |
| 61 | 62 | 63 | 64 | 65 | 66 | 67 | 68 | 69 | 70 |
| 71 | 72 | 73 | 74 | 75 | 76 | 77 | 78 | 79 | 80 |
| 81 | 82 | 83 | 84 | 85 | 86 | 87 | 88 | 89 | 90 |
| 91 | 92 | 93 | 94 | 95 | 96 | 97 | 98 | 99 | 100 |

Q9. Sort the number into the correct place on the table.

3495 ,6274 , 1093 , 4106 , 2871, 8264 , 2779

A number can be in more than one column.

| My thousands digit is less than 4 | My hundreds digit is odd | My tens digit is greater than 6 | I am an even number |
|-----------------------------------|--------------------------|---------------------------------|---------------------|
| 3495 | | 3495 | |

Q10. Write the greatest and the smallest number formed from the following digits without repeating any digit.

| S.No. | Digit | Greatest Number | Smallest Number |
|-------|------------|-----------------|-----------------|
| 1. | 5, 3, 0 | | |
| 2. | 1, 9, 0, 6 | | |
| 3. | 2, 1, 7, 8 | | |
| 4. | 3, 0, 6, 9 | | |
| 5. | 2, 4, 3 | | |

Q11. Fill in the missing numbers-

a. $6489 = 6000 + \dots + 80 + 9$

b. $\dots = 7000 + 400 + 2$

c. $5873 = 5000 + 800 + \dots + 3$

d. $9008 = \dots + 8$

e. $7173 = 7000 + 100 + \dots + 3$

MENTAL MATHS

1. Fill in the blanks:

- a. The smallest 3 – digit number is
 - b. The greatest 4 – digit number is
 - c. On adding 1 to the greatest 3 – digit number, we get
 - d. When the numbers 4821, 4128, 8421 and 1428 are arranged in ascending order, then the third number is
 - e. When the numbers 2759, 7259, 2579 and 5729 are arranged in descending order, then the second number is
 - f. The place value of 3 in 9387 is
 - g. The face value of 7 in 7001 is
 - h. The smallest 4 – digit number formed from the digits 2, 5, 0, 3 is
 - i. The greatest 4 – digit number formed from the digits 1, 9, 6, 7 is
 - j. On subtracting 1 from the greatest 4 – digit number, we get
 - k. Nine thousand eighteen is written in numbers as
 - l. 10 more than 5109 is
 - m. 100 more than 5109 is
 - n. 1000 more than 5109 is
 - o. 10 less than 6954 is
 - p. 100 less than 6954 is
 - q. 1000 less than 6954 is
-

ENVIRONMENTAL SCIENCE

Your wellbeing is our # 1 priority.

- ♣ Stay home, Stay safe, Stay healthy.
- ♣ Wash your hands frequently.
- ♣ Avoid touching your face.
- ♣ Eat healthy diet.

**The best six Doctors are
Sunshine, Water, Rest, Fresh Air,
Exercise and Balanced Diet.**

PROJECT 1(Science)

- Write 10-12 steps that we all need to follow to maintain cleanliness, proper hygiene and sanitation.
- Make a collage or a poster with slogans and pictures (you can draw or paste) for bringing awareness among people to take precautions against COVID 19, novel CORONA virus.

PROJECT 2 (SST)

- **LEARN** and write down names of all the States and Union Territories of India and their capitals.
- Government has divided the States and Union Territories of India into three zones- **Red, Orange and Green**. On a political map of India, mark 3 states having maximum area under-red zone, Orange zone and Green zone. (Use red, orange and green colours for these states.)
Solve the **WORKSHEETS** attached herewith-
 - Worksheets-1,2 (**SCIENCE**)
 - Worksheets- 3,4 (**S.ST**)


ALL THE ABOVE WORK CAN BE DONE IN SAME SCRAP OR PROJECT FILE.

| Value point → | 0 | 1 | 2 | 3 | 4 | 5 |
|---------------------------------|---|---|---|---|---|---|
| Rubrics ↓ | | | | | | |
| Completion of Project/worksheet | | | | | | |
| Neat and clean work | | | | | | |
| Content | | | | | | |
| Work Presentation | | | | | | |

WORKSHEET 1



On the plate below draw and colour the food you think would make a healthy diet.



1. Name a healthy snack.

2. Name an unhealthy snack.

3. Write any two ways to stay fit and healthy.

WORKSHEET 2

Write down some of your good and bad eating habits and how you wish to bring a change in the bad eating habits.

BAD EATING HABITS

GOOD EATING HABITS


Now share how you wish to bring a change in the bad eating habits.

Yes, I will change



WORKSHEET 3

Crossword puzzle - Capital Cities of Indian States 1



ACROSS


- 2 Capital of Tamil Nadu
- 5 Capital of Rajasthan
- 6 Capital of Jharkhand
- 8 Capital of Madhya Pradesh
- 10 Capital of West Bengal
- 11 Capital of Gujarat
- 13 Capital of Kerala

DOWN

- 1 Capital of Orissa
- 3 Capital of Maharashtra
- 4 Capital of Assam
- 7 Capital of Andhra Pradesh
- 8 Capital of Karnataka
- 9 Capital of Uttar Pradesh
- 12 Capital of Bihar

WORKSHEET 4

Crossword puzzle - Capital Cities of Indian States 2



ACROSS

- 1 Capital of Himachal Pradesh
- 3 Capital of Jammu and Kashmir in Summer
- 9 Capital of Mizoram
- 10 Capital of Punjab and Haryana
- 11 Capital of Goa
- 12 Capital of Sikkim

DOWN

- 1 Capital of Meghalaya
 - 2 Capital of Nagaland
 - 4 Capital of Chhattisgarh
 - 5 Capital of Tripura
 - 6 Capital of Manipur
 - 7 Capital of Arunachal Pradesh
 - 8 Capital of Uttarakhand
-